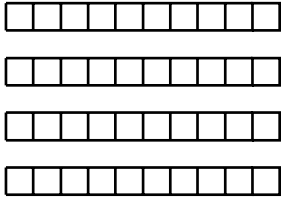


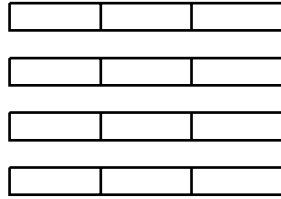
Mixed Numbers (1)

Shade the given fraction of each set of strips.

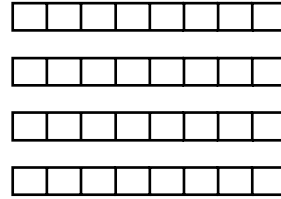
Name _____



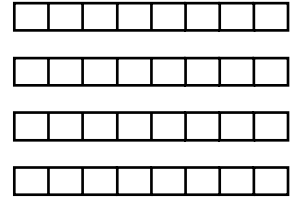
$1 \frac{1}{2}$



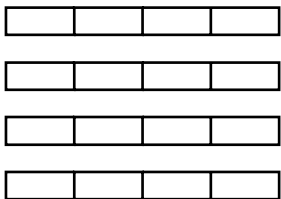
$3 \frac{1}{3}$



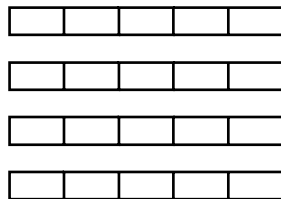
$1 \frac{1}{8}$



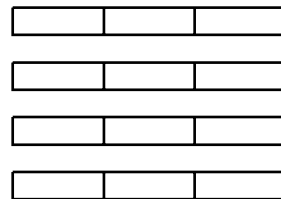
$2 \frac{1}{4}$



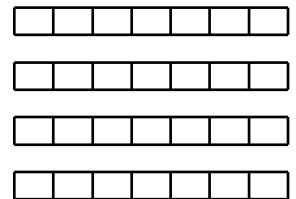
$2 \frac{1}{2}$



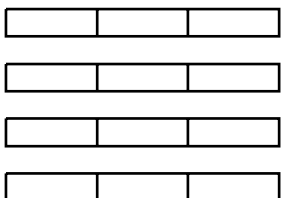
$1 \frac{2}{5}$



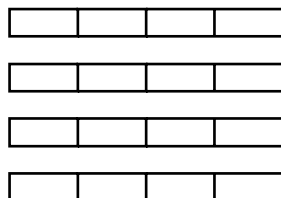
$1 \frac{1}{3}$




$2 \frac{4}{7}$



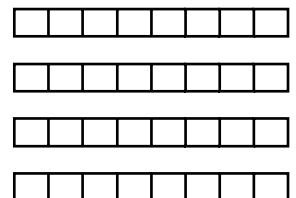
$1 \frac{1}{3}$



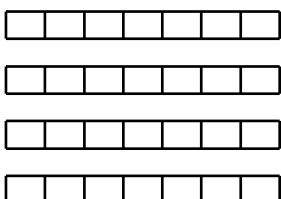
$3 \frac{1}{4}$



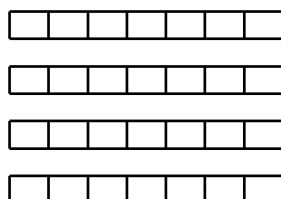
$2 \frac{4}{5}$



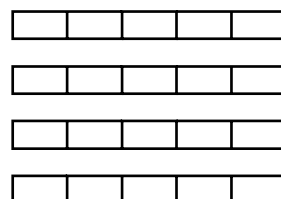
$2 \frac{1}{8}$




$1 \frac{3}{7}$



$1 \frac{4}{7}$



$2 \frac{4}{5}$



$2 \frac{1}{3}$