
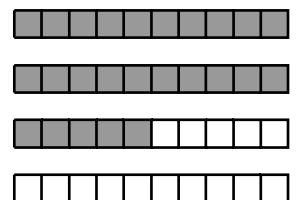
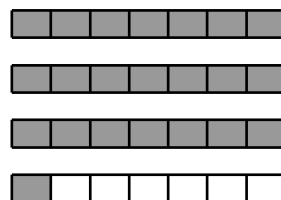
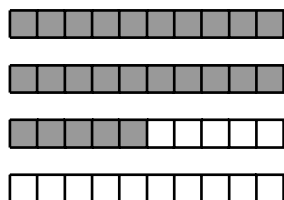
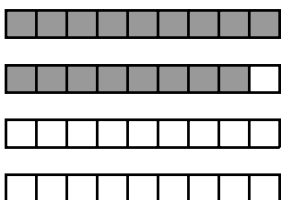


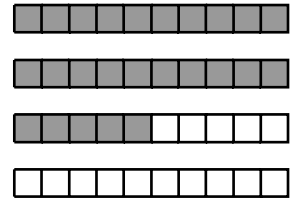
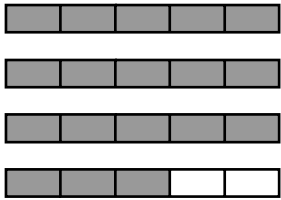


# Mixed Numbers (2)

State the fraction of each set of strips.

Name \_\_\_\_\_



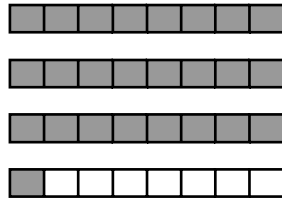
# Mixed Numbers (2)

State the fraction of each set of strips.

Name \_\_\_\_\_



$$3 \frac{3}{5}$$



$$3 \frac{1}{8}$$




$$3 \frac{3}{7}$$



$$2 \frac{1}{2}$$




$$2 \frac{4}{5}$$




$$3 \frac{1}{2}$$



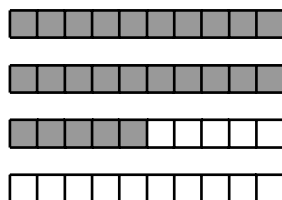
$$1 \frac{1}{4}$$



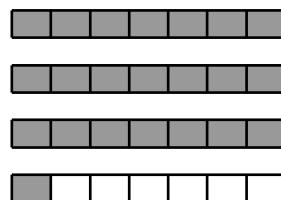
$$1 \frac{1}{2}$$



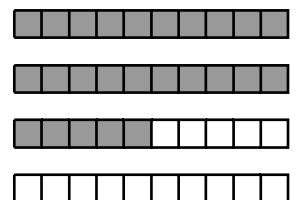
$$1 \frac{8}{9}$$




$$2 \frac{1}{2}$$



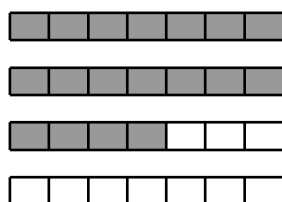
$$3 \frac{1}{7}$$



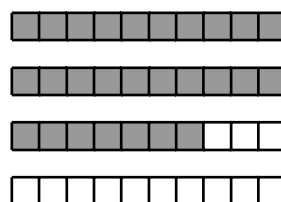
$$2 \frac{1}{2}$$



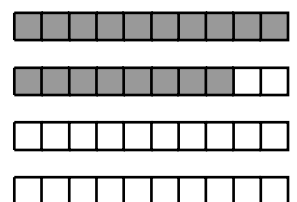
$$3 \frac{1}{2}$$



$$2 \frac{4}{7}$$



$$2 \frac{7}{10}$$



$$1 \frac{4}{5}$$